

Scaling

1 Aisha has some fruit.



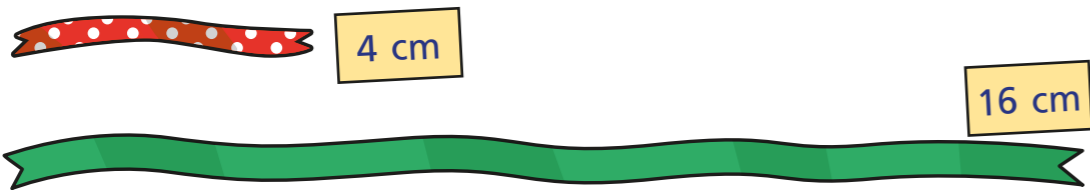
Complete the sentences to describe the fruit.

There are apples.

There are strawberries.

There are times as many strawberries as apples.

2 Huan is comparing 2 pieces of ribbon.



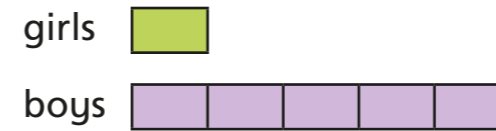
Complete the sentences to describe the ribbon.

The spotty ribbon measures

The plain ribbon measures

The plain ribbon is times as long as the spotty ribbon.

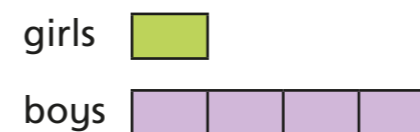
3 Match the bar models to the statements.
Write the missing statement.



There are 4 times as many boys as girls.



There are 3 times as many boys as girls.



4 There are 3 purple balloons.
There are 4 times as many pink balloons.
Complete the bar model to show how many pink balloons there are.

