

# Maths Revision Paper 1



Complete the sequences

3, 6, 9, 12, 15, ....., .....


54, 64, ....., 84, .....

What is a multiple?

1



What fraction is shaded?



Can you draw me these shapes?

circle

rectangle

kite

pentagon



Let's look at time

Let's investigate function  
machines

Let's learn about perimeter!

# 30 Days Has September

30 Days has September,  
April, June and November.



All the rest have 31,

Except for February, it's the one,

Which only has 28 days clear,

And 29 in each Leap Year.

# Maths Test 2 Revision!

Let's discuss different units

What is the biggest number you can make using these numbers?

7

2

4

## Match the times

14:02

Nine minutes past eleven

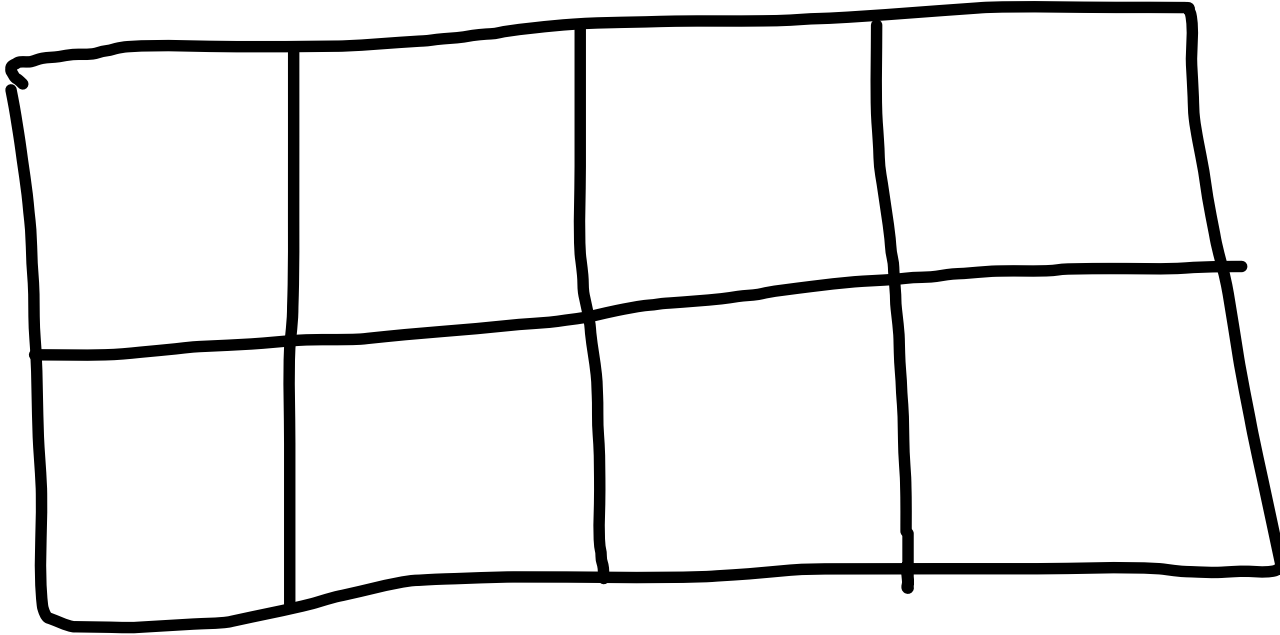
11:09

Twenty seven minutes past five

17:27

Two minutes past two

Shade  $\frac{1}{4}$  of  
the shape



Work out the missing number

$$34 + \quad = 60$$

$$27 + \quad = 99$$

Let's look at some 3D shapes.

Let's look at some pictograms.

What is the difference between 43 and 12?

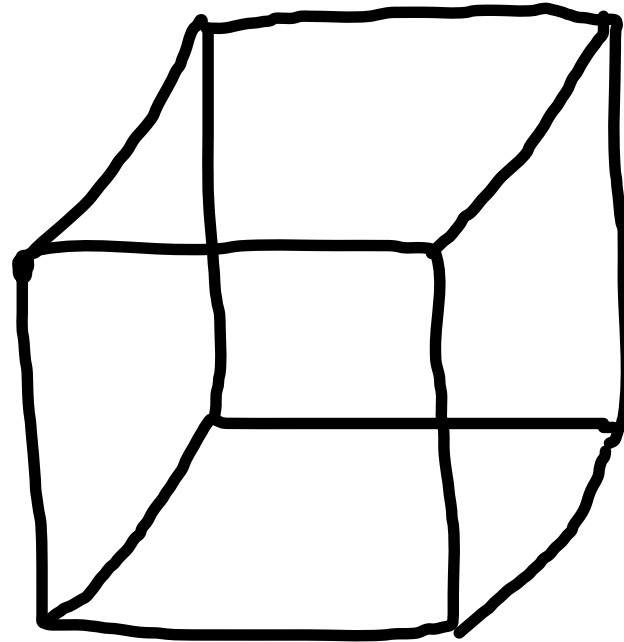
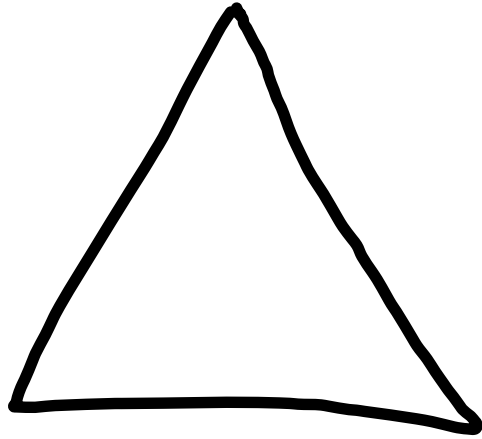
My number has 4 tens

My number has 3 hundreds

My number is even

What could it be?

How many edges do these shapes have?



Miss Watton is making a pattern. Counting in 5's from 0. What is her first number over 21?