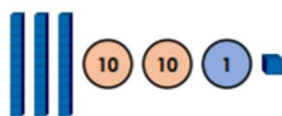


7a. Thomas thinks he has divided 620 by 10 to find the answer below.

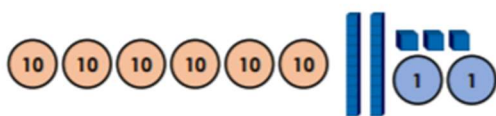


Is he correct?  
Explain how you know.



R

7b. Anna thinks she has divided 850 by 10 to find the answer below.



Is she correct?  
Explain how you know.



R

8a. Mr Wood and Miss Chung are meeting with parents. Each meeting lasts for 10 minutes.

Altogether they spent 360 minutes in meetings.




How many meetings could Mr Wood and Miss Chung have had each? Find 3 possibilities.



PS

8b. Miah and Jack are colouring pictures in their books. It takes 10 minutes to colour each picture.

Altogether they colour for 420 minutes.



How many pictures could Miah and Jack have coloured each? Find 3 possibilities.



PS

9a. A recipe makes 10 scones. These are some of the ingredients:

460g flour  
240g raisins  
250ml milk

Hannah says,

To make 1 scone, I will need 22g of raisins.



Is she correct? Prove it.



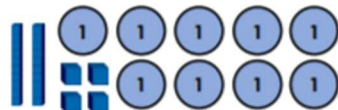
R

9b. A recipe makes 10 flapjacks. These are some of the ingredients:

310g oats  
240g butter  
270g syrup

Liam says,

To make 1 flapjack, I will need 33g of oats.



Is he correct? Prove it.



R