

- 4 Aisha is counting pieces of fruit.


How many strawberries are there altogether?



There are strawberries.

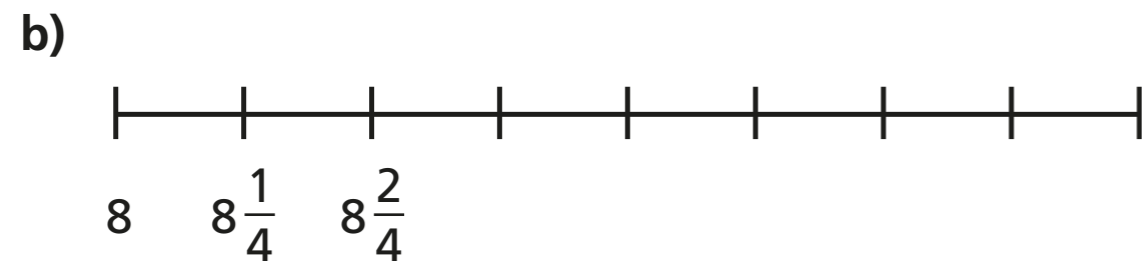
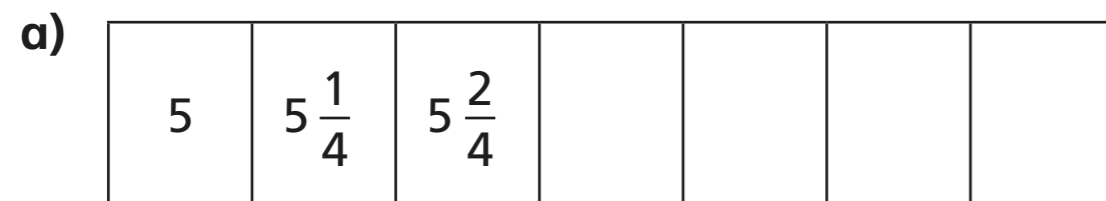
- 5 The children in the class would like a whole apple each.

How many whole apples can be made from these quarters?

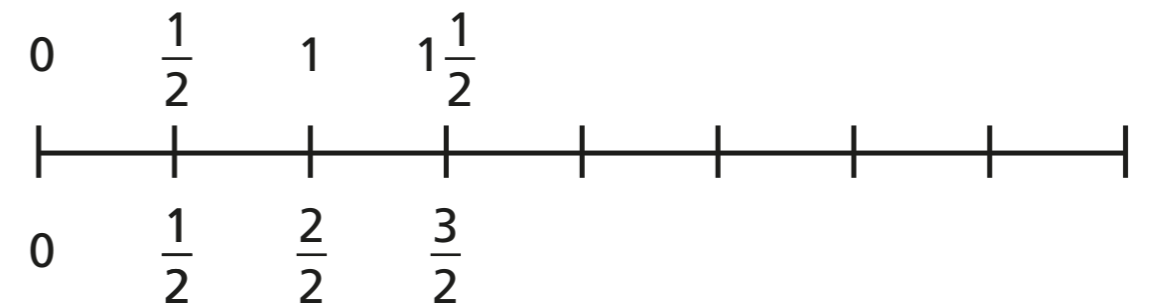


whole apples can be made.

- 6 Write the missing fractions.




- 7 Complete the number line.



What is the same? What is different?

- 8 Ron is counting to 3 in thirds.



0, $\frac{1}{3}$, $\frac{2}{3}$, $\frac{3}{3}$, $\frac{4}{3}$, $\frac{5}{3}$, $\frac{6}{3}$, $\frac{7}{3}$, $\frac{8}{3}$, $\frac{9}{3}$

Is Ron correct? _____

Use the number line to show how you know this.

