

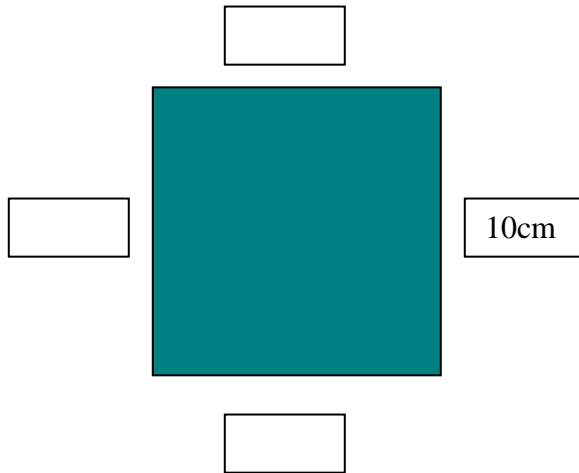


Find the missing measurements

Look at these shapes and fill in the missing measurements. Remember to use the correct unit of measurement (mm, cm, m or km).

Can you also name the shape and work out the perimeter?

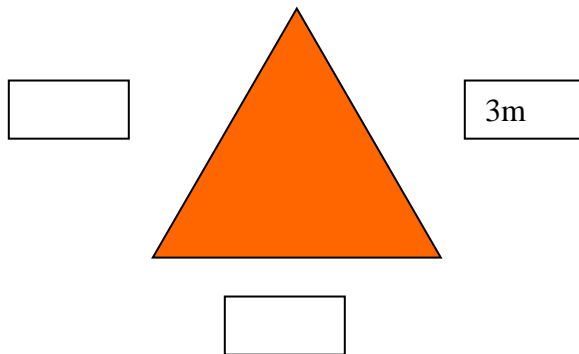
1)



Name of this shape: **square**

Perimeter: **40cm**

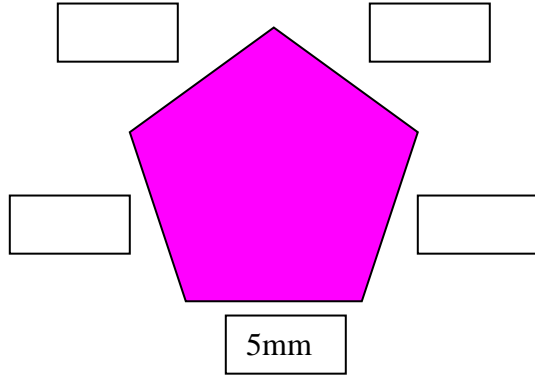
2)



Name of this shape: **triangle (Equilateral)**

Perimeter: **9m**

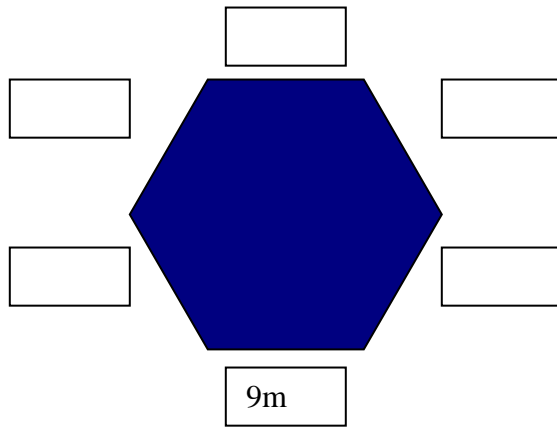
3)



Name of this shape: **Pentagon**

Perimeter: **25mm**

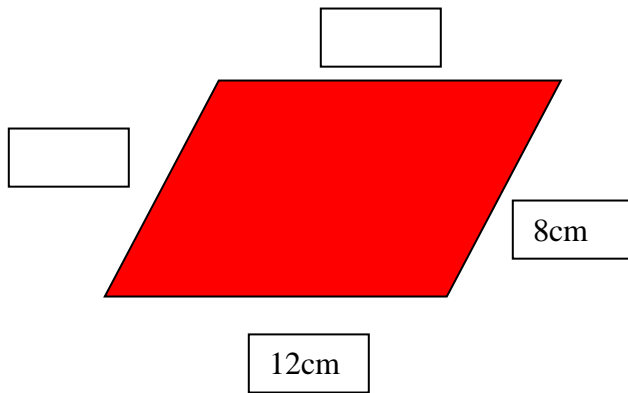
4)



Name of this shape: **Hexagon**

Perimeter: **54m**

5)



Name of this shape:
Parallelogram

Perimeter: **40cm**