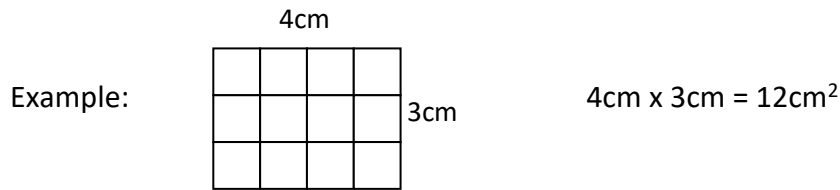
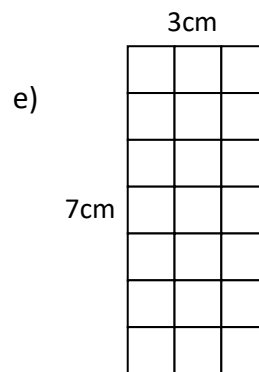
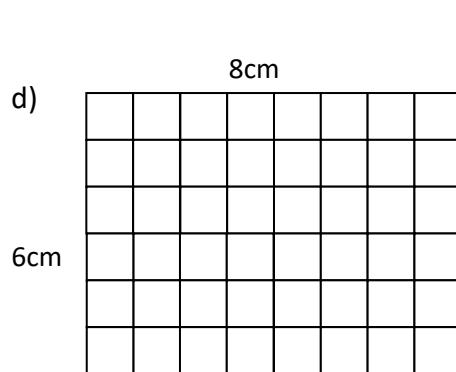
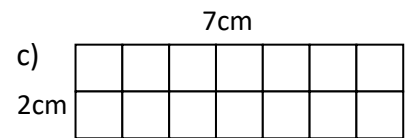
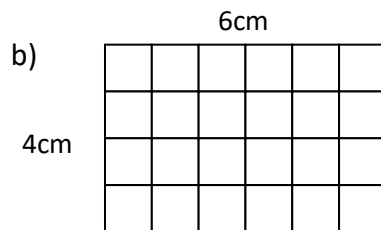
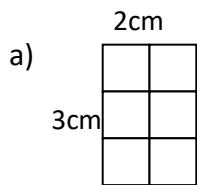


**Area:** the amount of space inside a shape



1. Find the area of the following rectangles: a)  $6\text{cm}^2$ , b)  $24\text{cm}^2$ , c)  $14\text{cm}^2$ , d)  $48\text{cm}^2$ , e)  $21\text{cm}^2$



2. Find the perimeter and area of the following rectangles: a)  $15\text{cm}^2$ , b)  $12\text{cm}^2$ , c)  $6\text{cm}^2$ , d)  $6\text{cm}^2$ , e)  $7\text{cm}^2$ , f)  $4\text{cm}^2$

