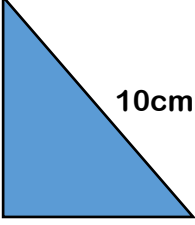
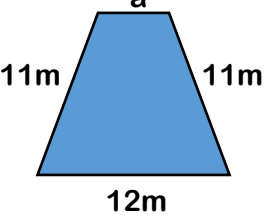
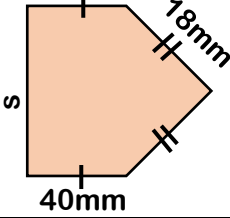
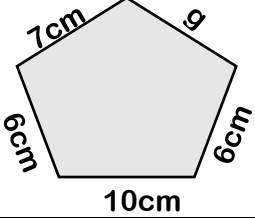
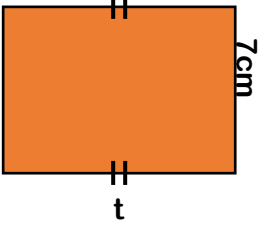
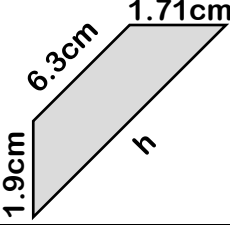


Padding
Calculate missing lengths in polygons

Name each shape and find the missing length showing your working out. **Remember to write the units**

<p>a. Perimeter = 24cm</p> 	<p>b. Perimeter = 40m</p> 	<p>c. Perimeter = 132mm</p> 	<p>d. Perimeter = 36cm</p> 
	<p>f. Perimeter = 30cm</p> 	<p>g. Perimeter = 17cm</p> 	<p>h. Perimeter = 38m</p> 