

Answers

Padding

1 Complete the number sentences.

a) $\frac{1}{4}$ of 20 =



d) $\frac{1}{4}$ of 40 =



b) $\frac{1}{5}$ of 20 =



e) $\frac{1}{8}$ of 40 =



c) $\frac{1}{10}$ of 20 =



f) $\frac{1}{8}$ of 80 =



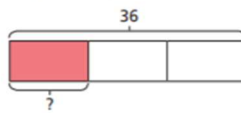
1a. 5

2a. 7

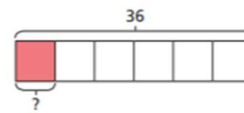
3a. 12

4a. A. 8; B. 6; C. 5; D. 8

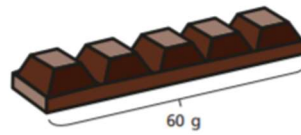
g) $\frac{1}{3}$ of 36 =



h) $\frac{1}{6}$ of 36 =



2 Filip has a chocolate bar with 5 equal pieces.
The chocolate bar weighs 60 g.



a) What is the mass of one piece?

The mass of one piece is g.

b) Filip eats $\frac{3}{5}$ of the bar of chocolate.
How many grams does Filip eat?

Filip eats g of chocolate.

1b. 8

2b. 6

3b. 15

4b. A. 5; B. 7; C. 11; D. 14