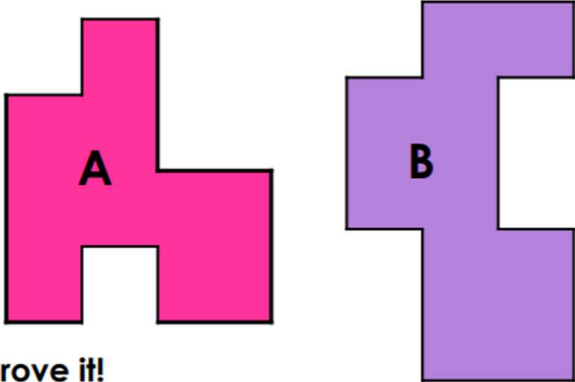


7a. True or false? The perimeters of these shapes are the same.



Prove it!

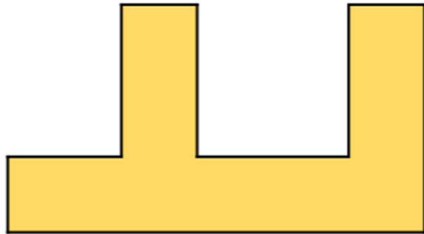


PS

8a. Lisa says,



I used a ruler to measure the shape below. The perimeter is 20cm.




What mistake has Lisa made? Prove it!



R

9a. On 1cm squared paper draw an 8-sided rectilinear shape with a perimeter that is more than 14cm and less than 20cm, and that is an odd number.



PS