
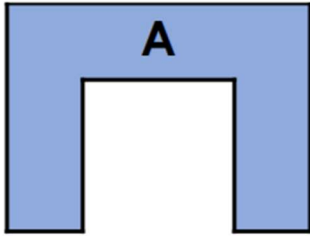


4a. True or false? The perimeters of these shapes are the same.



Prove it!



PS

5a. Judy says,



I used a ruler to measure the shape below. The perimeter is 16cm.




What mistake has Judy made? Prove it!



R

6a. On 1cm squared paper draw a 6-sided rectilinear shape with a perimeter of more than 16cm but less than 20cm.



PS