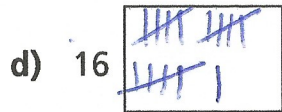

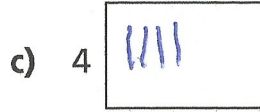


Make tally charts

1 Draw tally marks to represent each number.



2 There are some socks on a washing line.

The socks are spotty, stripy or plain.



Complete the tally chart.

Sock	Tally
spotty	4
stripy	5
plain	6

3 Class 2 tally the number of pencils, rubbers and rulers they have.

Item	Tally
✓ pencils	4
✓ rubbers	7
✓ rulers	4

Draw the items. The rulers have been drawn for you.

